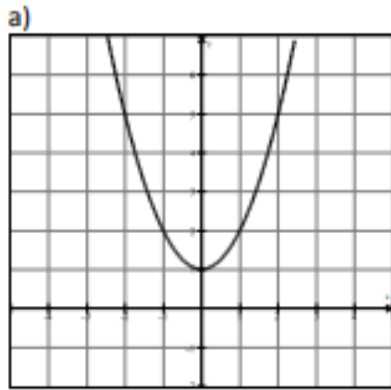


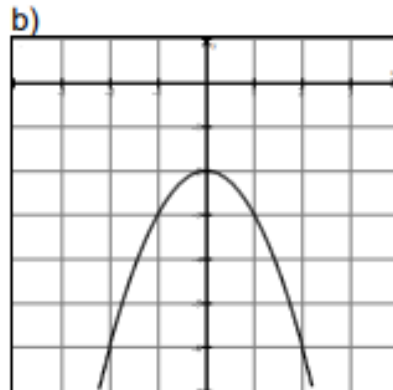
EJERCICIOS EN CLASE MATEMÁTICAS VI A1 y A2

Presentar impreso el 23 de agosto de 2024.

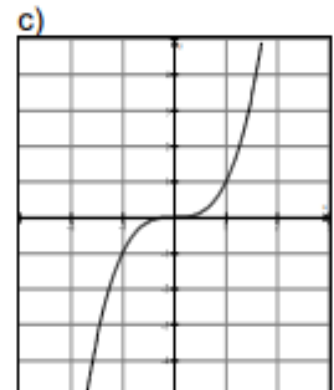
Instrucción.- En las siguientes representaciones gráficas de funciones, determine su dominio y rango.



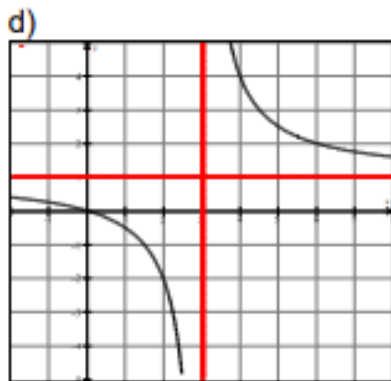
Dominio _____
Rango _____



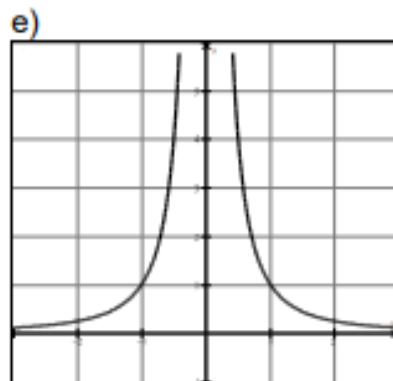
Dominio _____
Rango _____



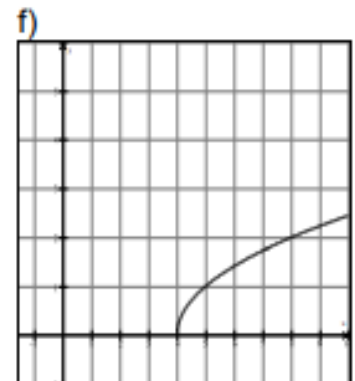
Dominio _____
Rango _____



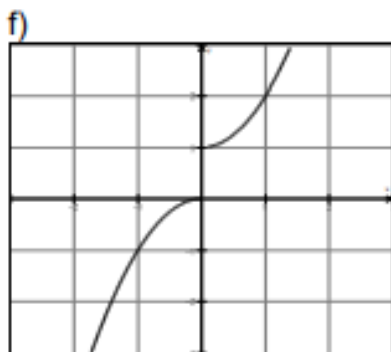
Dominio _____
Rango _____



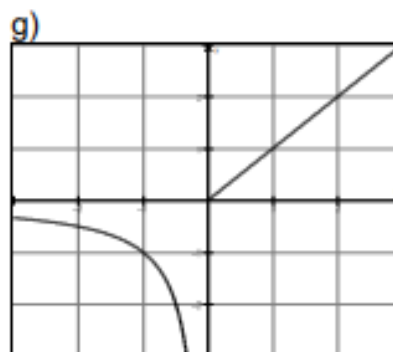
Dominio _____
Rango _____



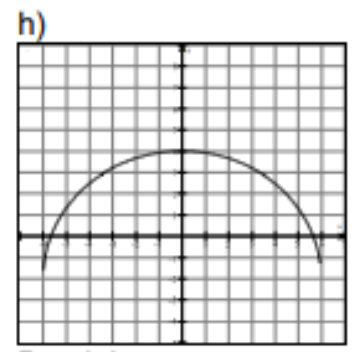
Dominio _____
Rango _____



Dominio _____
Rango _____



Dominio _____
Rango _____



Dominio _____
Rango _____